

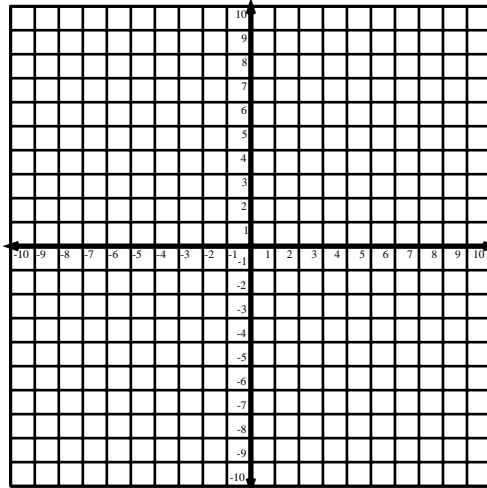
Name: \_\_\_\_\_ Date: \_\_\_\_\_

## Tables & Graphs

Fill in values for each table. Then, plot the points from your table. Connect the points with a smooth line.

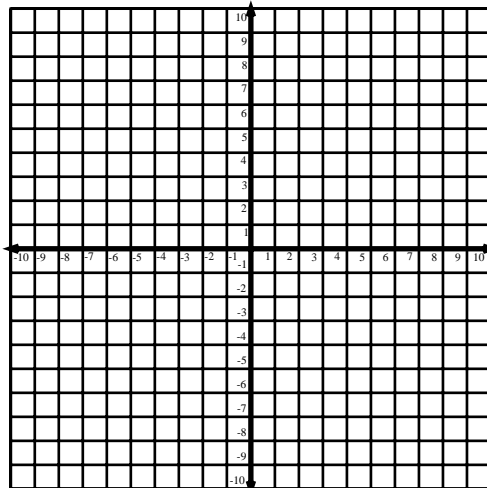
1.

$x$	$y = 2x$
-2	
-1	
0	
1	
2	
3	



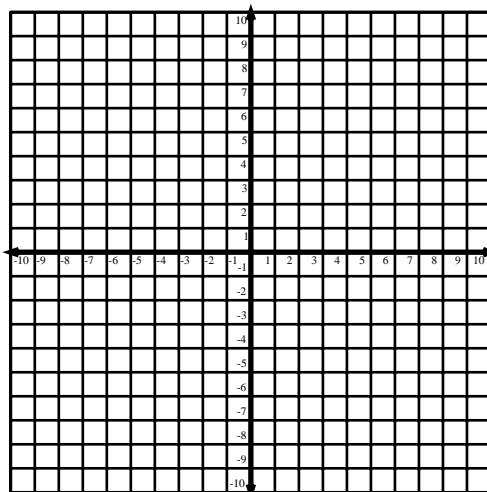
2.

$x$	$y + x = 4$
-2	
-1	
0	
1	
2	
3	



3.

$x$	$y = x$
-2	
-1	
0	
1	
2	
3	

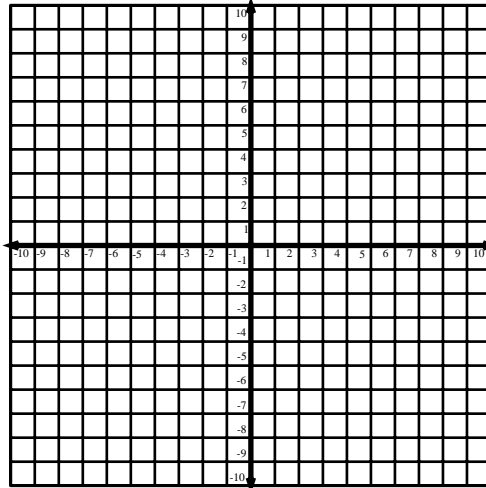


Name: \_\_\_\_\_

**Tables & Graphs**

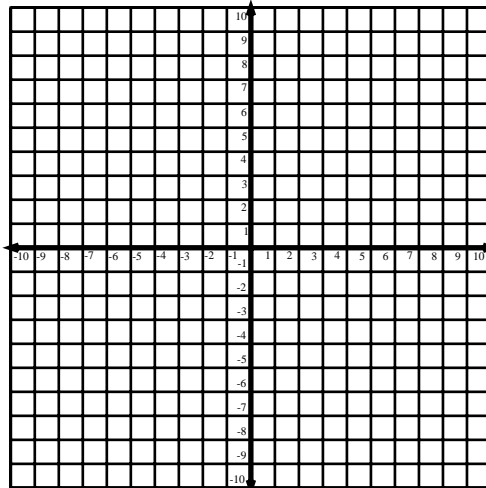
4.

$x$	$y = 2x + 3$
-2	
-1	
0	
1	
2	
3	



5.

$x$	$y = x + 2$
-2	
-1	
0	
1	
2	
3	



6.

$x$	$y = 3x - 1$
-2	
-1	
0	
1	
2	
3	

