

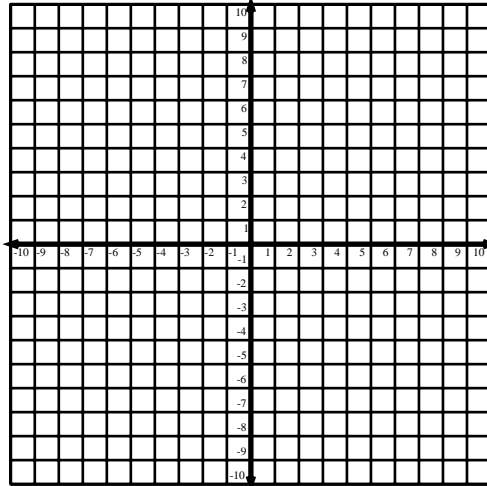
Name: _____ Date: _____

Tables & Graphs 2

Fill in values for each table. Then, plot the points from your table. Connect the points with a smooth line.

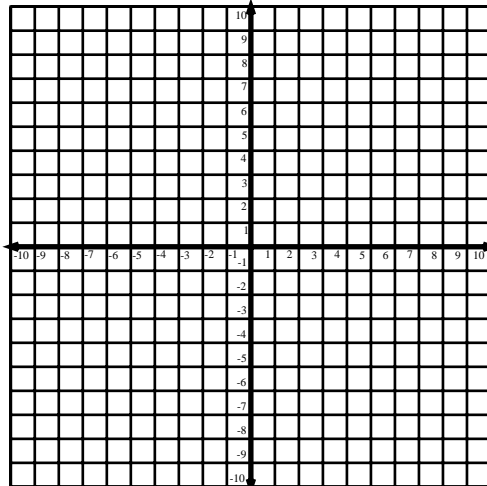
1.

x	$y = 3x$
-2	
-1	
0	
1	
2	
3	



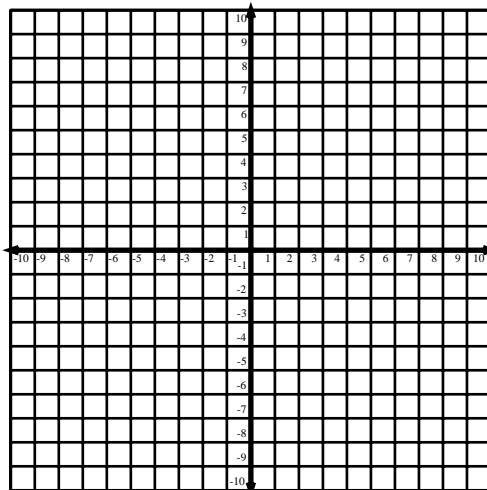
2.

x	$y = x - 5$
-2	
-1	
0	
1	
2	
3	



3.

x	$y = 3x + 1$
-2	
-1	
0	
1	
2	
3	

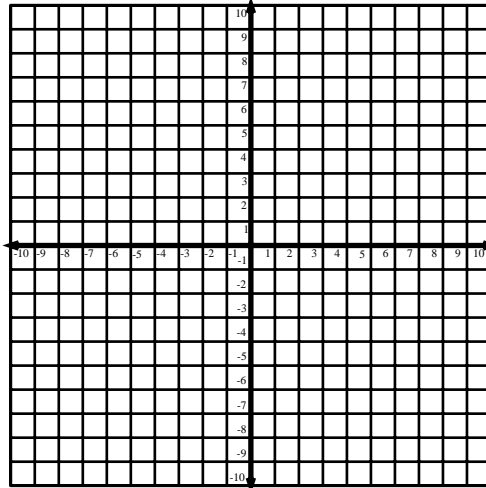


Name: _____

Tables & Graphs 2

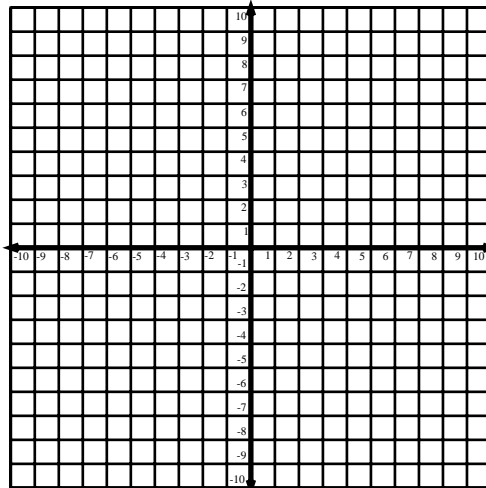
4.

x	$y = x + 1$
-2	
-1	
0	
1	
2	
3	



5.

x	$y = x + 2$
-2	
-1	
0	
1	
2	
3	



6.

x	$y = 2x - 1$
-2	
-1	
0	
1	
2	
3	

