

Name: _____ Date: _____

Graphing Slope-Intercept Form 1

Answer the following questions, then graph each line.

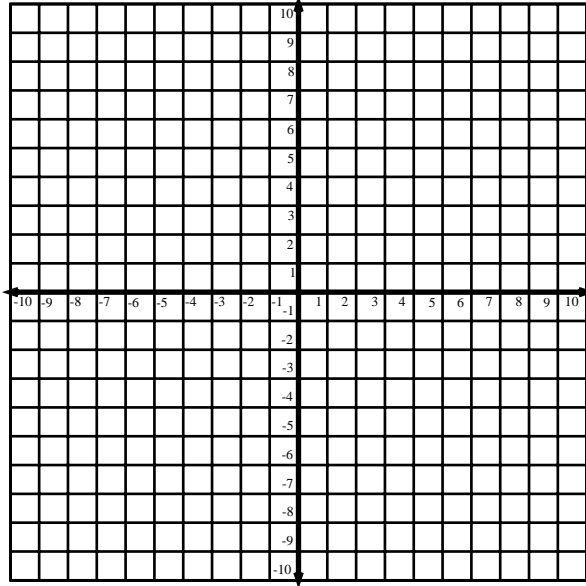
1. $y = \frac{2}{3}x + 3$

What is the y-intercept? _____

What is the slope (as a fraction)? _____

The slope says to move _____ boxes right.

The slope says to move _____ boxes up.



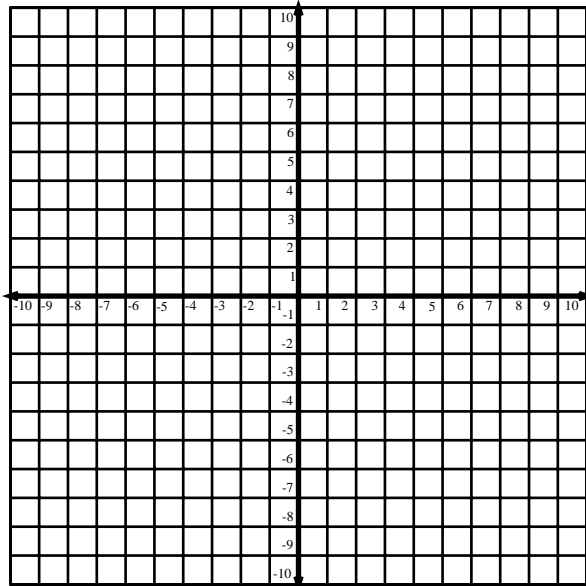
2. $y = \frac{3}{5}x - 4$

What is the y-intercept? _____

What is the slope (as a fraction)? _____

The slope says to move _____ boxes right.

The slope says to move _____ boxes up.



Name: _____

Graphing Slope-Intercept Form 1

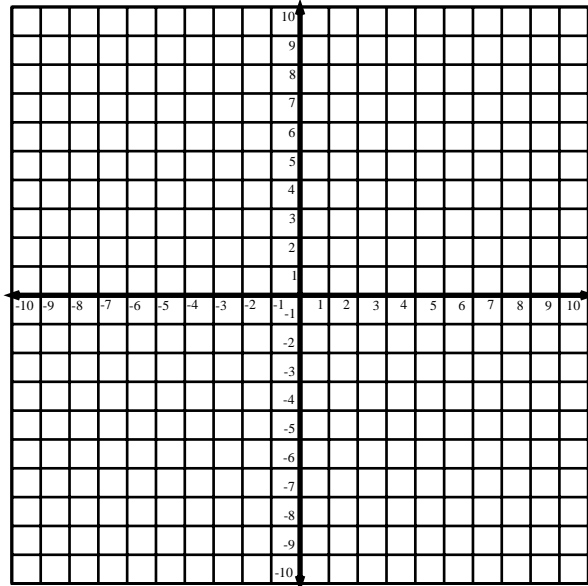
3. $y = 2x + 1$

What is the y-intercept? _____

What is the slope (as a fraction)? _____

The slope says to move _____ boxes right.

The slope says to move _____ boxes up.



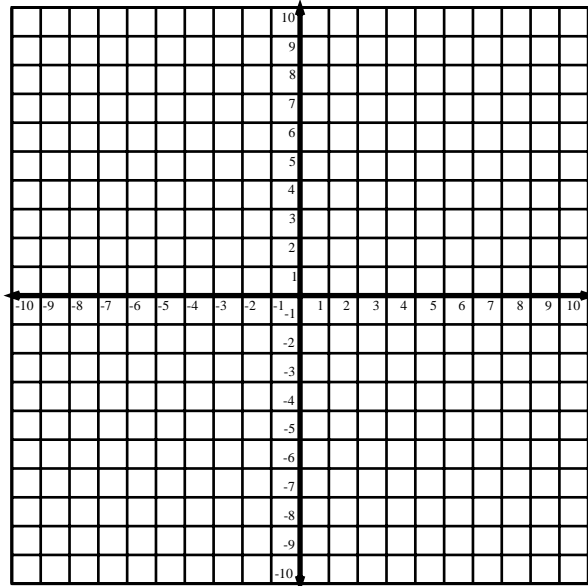
4. $y = \frac{1}{4}x - 6$

What is the y-intercept? _____

What is the slope (as a fraction)? _____

The slope says to move _____ boxes right.

The slope says to move _____ boxes up.



Name: _____

Graphing Slope-Intercept Form 1

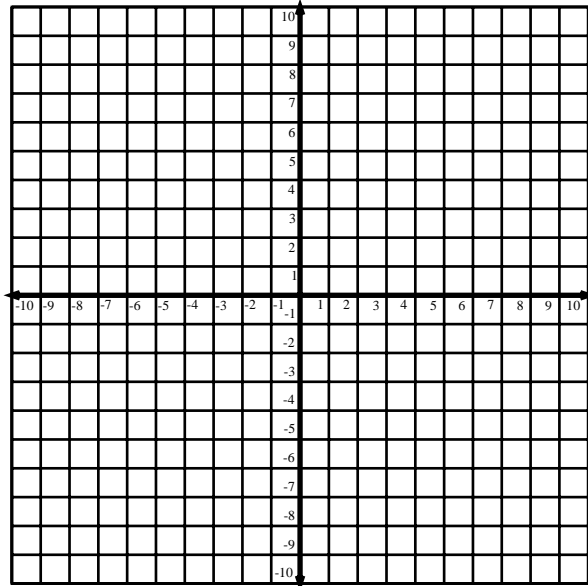
5. $y = \frac{2}{3}x$

What is the y-intercept? _____

What is the slope (as a fraction)? _____

The slope says to move _____ boxes right.

The slope says to move _____ boxes up.



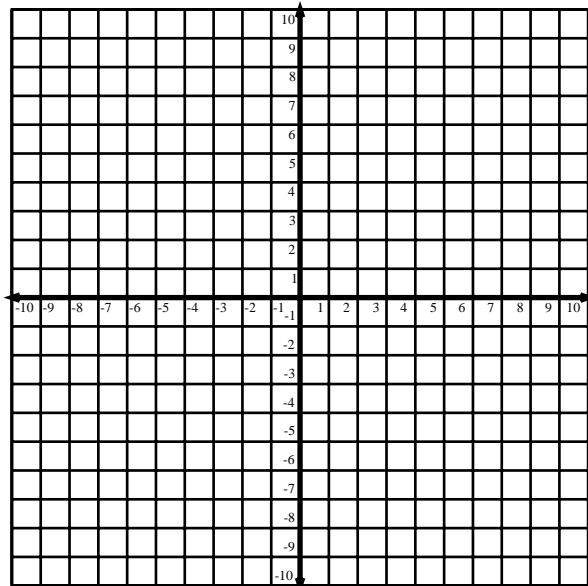
6. $y = \frac{2}{5}x + 3$

What is the y-intercept? _____

What is the slope (as a fraction)? _____

The slope says to move _____ boxes right.

The slope says to move _____ boxes up.



Name: _____

Graphing Slope-Intercept Form 1

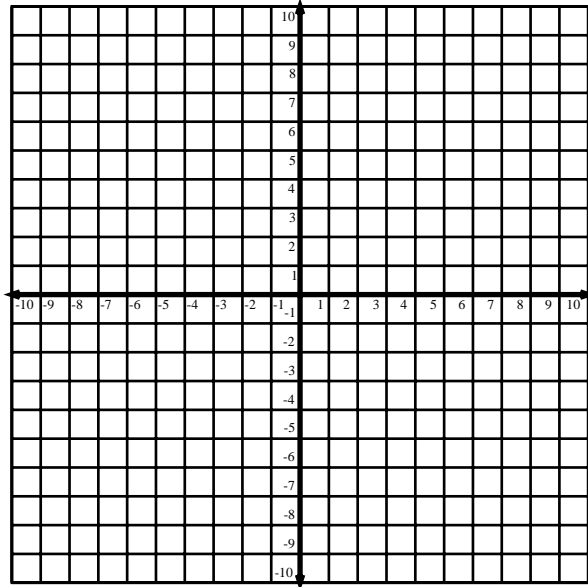
7. $y = 3x - 2$

What is the y-intercept? _____

What is the slope (as a fraction)? _____

The slope says to move _____ boxes right.

The slope says to move _____ boxes up.



8. $y = \frac{3}{2}x - 9$

What is the y-intercept? _____

What is the slope (as a fraction)? _____

The slope says to move _____ boxes right.

The slope says to move _____ boxes up.

