

Name: _____ Date: _____

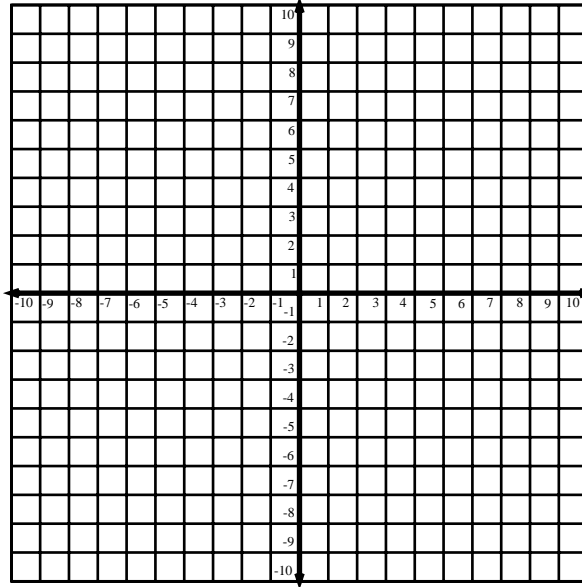
Graphing Standard Form Lines 1

Find the x and y intercepts of each graph, then graph the line.

1. $3y + 2x = 12$

x -intercept:

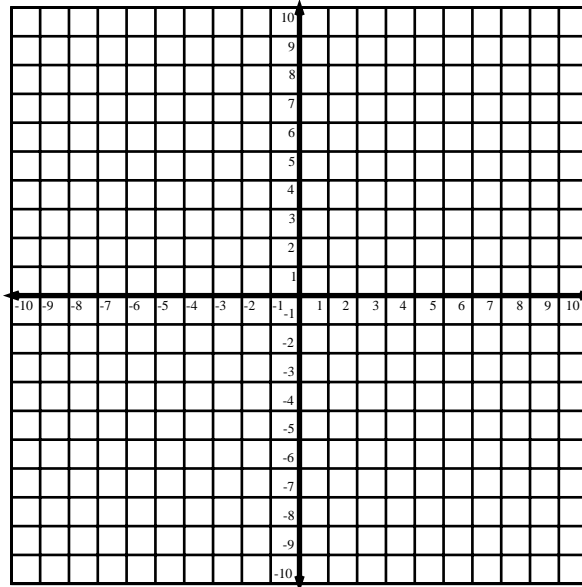
y -intercept:



2. $4x - 2y = -8$

x -intercept:

y -intercept:



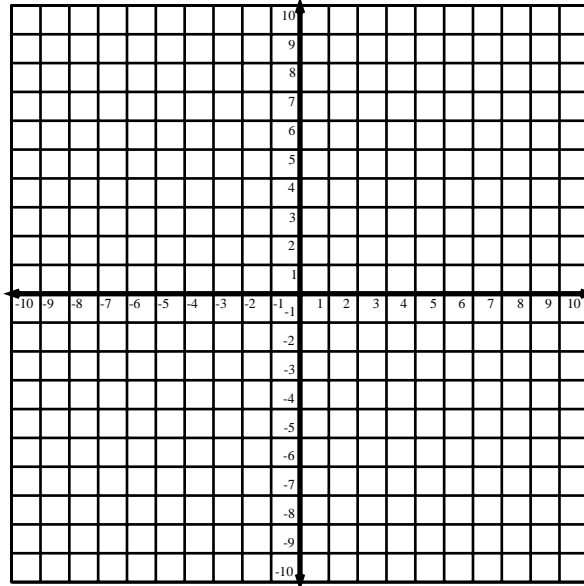
Name: _____

Graphing Standard Form Lines 1

3. $6y - 9x = 18$

x -intercept:

y -intercept:



4. $5x + 2y = 20$

x -intercept:

y -intercept:

