

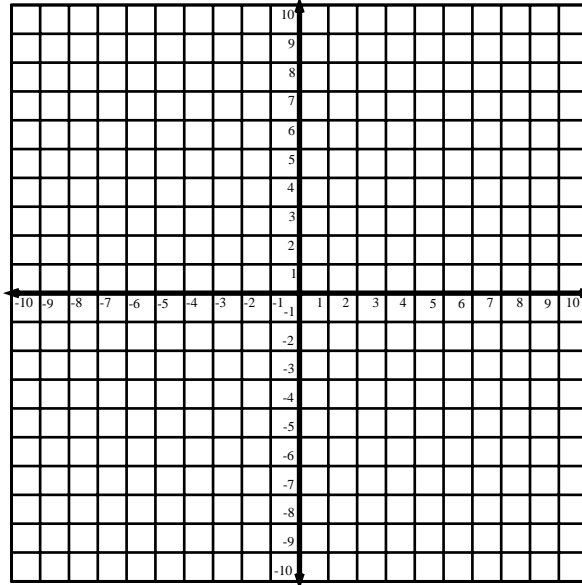
Name: _____ Date: _____

Graphing Standard Form Lines 2

Find the x and y intercepts of each graph, then graph the line.

1. $12 = 3x + 2y$

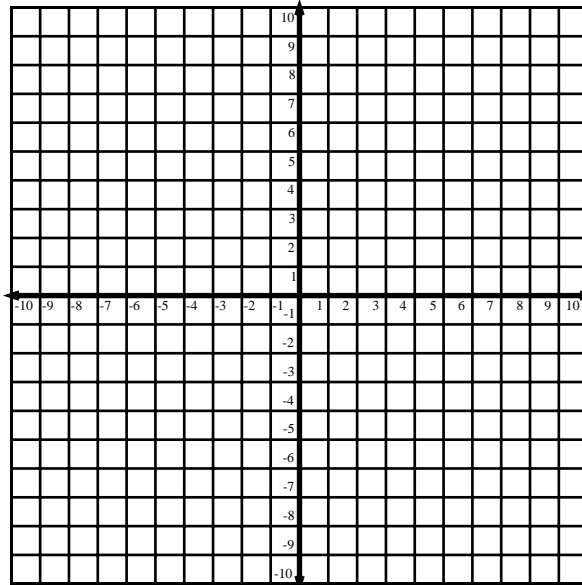
x -intercept:



y -intercept:

2. $6x - 4y = -36$

x -intercept:



y -intercept:

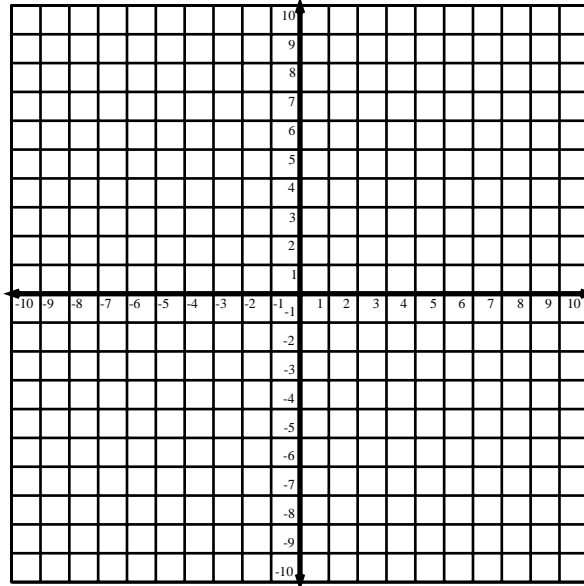
Name: _____

Graphing Standard Form Lines 2

3. $8y + 6x = -24$

x -intercept:

y -intercept:



4. $5y - 10x = 40$

x -intercept:

y -intercept:

