

Name: _____ Date: _____

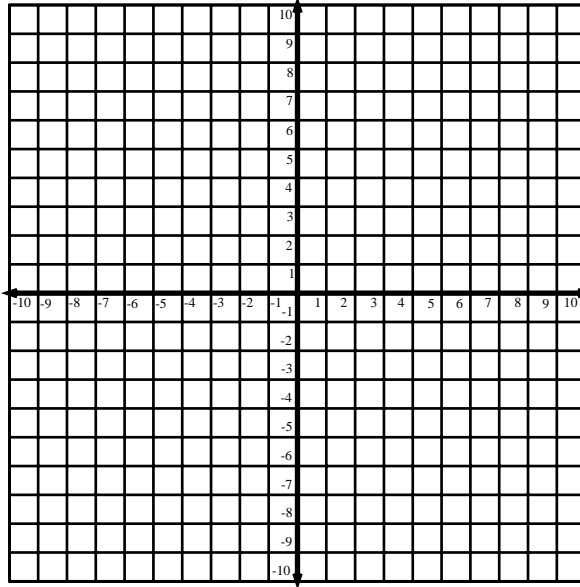
Graphing Standard Form Lines 3

Find the x and y intercepts of each graph, then graph the line.

1. $5x - 8y = 40$

x -intercept:

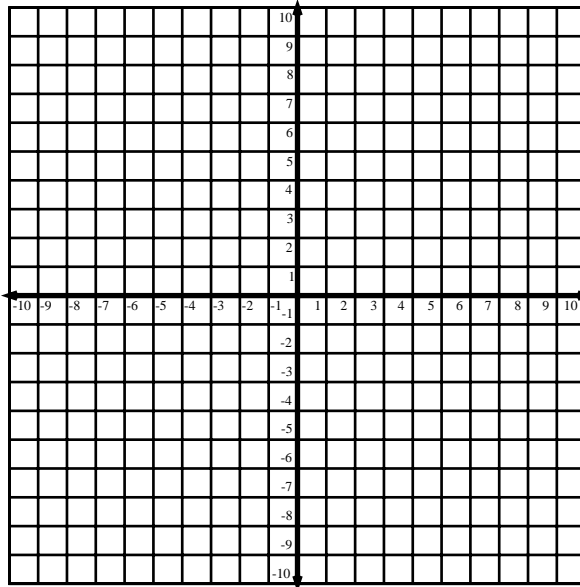
y -intercept:



2. $6y + 4x = 36$

x -intercept:

y -intercept:



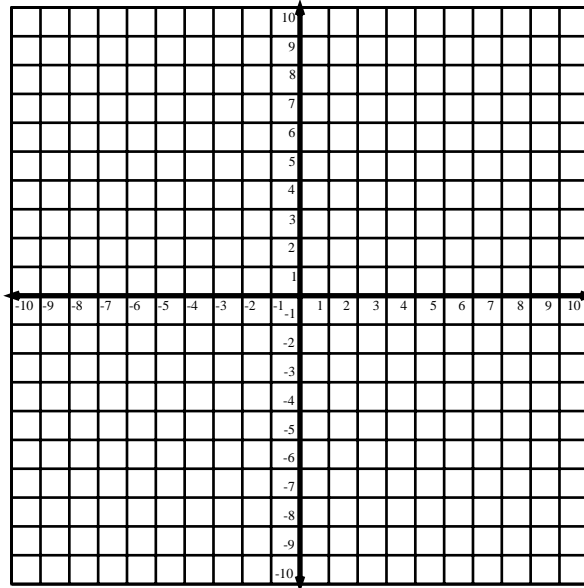
Name: _____

Graphing Standard Form Lines 3

3. $x - 3y = -9$

x -intercept:

y -intercept:



4. $3y - 5x = -30$

x -intercept:

y -intercept:

